

**NEET-2017 TEST PAPER WITH ANSWER & SOLUTIONS
(HELD ON SUNDAY 07th MAY, 2017)**

136. Name the gas that can readily decolourise acidified KMnO_4 solution :

- (1) SO_2 (2) NO_2 (3) P_2O_5 (4) CO_2

Ans. (1)

137. Mechanism of a hypothetical reaction

$\text{X}_2 + \text{Y}_2 \rightarrow 2\text{XY}$ is given below :

- (i) $\text{X}_2 \rightarrow \text{X} + \text{X}$ (fast)
 (ii) $\text{X} + \text{Y}_2 \rightleftharpoons \text{XY} + \text{Y}$ (slow)
 (iii) $\text{X} + \text{Y} \rightarrow \text{XY}$ (fast)

The overall order of the reaction will be :

- (1) 2 (2) 0 (3) 1.5 (4) 1

Ans. (3)

138. The element $Z = 114$ has been discovered recently. It will belong to which of the following family/group and electronic configuration ?

- (1) Carbon family, $[\text{Rn}] 5f^{14} 6d^{10} 7s^2 7p^2$
 (2) Oxygen family, $[\text{Rn}] 5f^{14} 6d^{10} 7s^2 7p^4$
 (3) Nitrogen family, $[\text{Rn}] 5f^{14} 6d^{10} 7s^2 7p^6$
 (4) Halogen family, $[\text{Rn}] 5f^{14} 6d^{10} 7s^2 7p^5$

Ans. (1)

139. The heating of phenyl-methyl ethers with HI produces

- (1) iodobenzene (2) phenol
 (3) benzene (4) ethyl chlorides

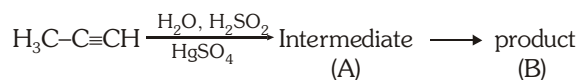
Ans. (2)

140. Which one is the correct order of acidity ?

- (1) $\text{CH} \equiv \text{CH} > \text{CH}_3 - \text{C} \equiv \text{CH} > \text{CH}_2 = \text{CH}_2 > \text{CH}_3 - \text{CH}_3$
 (2) $\text{CH} \equiv \text{CH} > \text{CH}_2 = \text{CH}_2 > \text{CH}_3 - \text{C} \equiv \text{CH} > \text{CH}_3 - \text{CH}_3$
 (3) $\text{CH}_3 - \text{CH}_3 > \text{CH}_2 = \text{CH}_2 > \text{CH}_3 - \text{C} \equiv \text{CH} > \text{CH} \equiv \text{CH}$
 (4) $\text{CH}_2 = \text{CH}_2 > \text{CH}_3 - \text{CH} = \text{CH}_2 > \text{CH}_3 - \text{C} \equiv \text{CH} > \text{CH} \equiv \text{CH}$

Ans. (1)

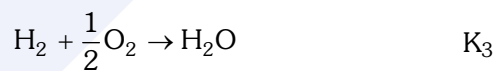
141. Predict the correct intermediate and product in the following reaction :



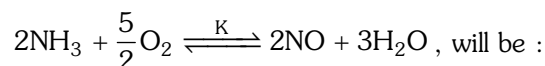
- (1) A : $\text{H}_3\text{C}-\underset{\text{OH}}{\text{C}}=\text{CH}_2$ B : $\text{H}_3\text{C}-\underset{\text{SO}_4}{\text{C}}=\text{CH}_2$
 (2) A : $\text{H}_3\text{C}-\underset{\text{O}}{\text{C}}-\text{CH}_3$ B : $\text{H}_3\text{C}-\text{C} \equiv \text{CH}$
 (3) A : $\text{H}_3\text{C}-\underset{\text{OH}}{\text{C}}=\text{CH}_2$ B : $\text{H}_3\text{C}-\underset{\text{O}}{\text{C}}-\text{CH}_3$
 (4) A : $\text{H}_3\text{C}-\underset{\text{SO}_4}{\text{C}}=\text{CH}_2$ B : $\text{H}_3\text{C}-\underset{\text{O}}{\text{C}}-\text{CH}_3$

Ans. (3)

142. The equilibrium constant of the following are :



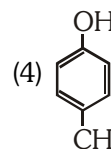
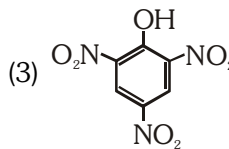
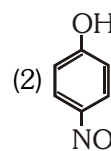
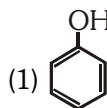
The equilibrium constant (K) of the reaction :



- (1) $K_2 K_3^3 / K_1$ (2) $K_2 K_3 / K_1$
 (3) $K_2^3 K_3 / K_1$ (4) $K_1 K_3^3 / K_2$

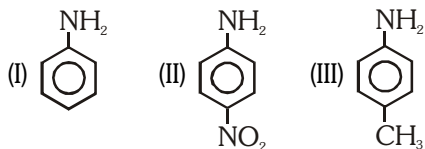
Ans. (1)

143. Which one is the most acidic compound ?



Ans. (3)

144. The **correct** increasing order of basic strength for the following compounds is :



- (1) III < I < II (2) III < II < I
 (3) II < I < III (4) II < III < I

Ans. (3)

145. Ionic mobility of which of the following alkali metal ions is lowest when aqueous solution of their salts are put under an electric field ?

- (1) K (2) Rb
 (3) Li (4) Na

Ans. (3)

146. The most suitable method of separation of 1 : 1 mixture of ortho and para-nitrophenols is :

- (1) Chromatography (2) Crystallisation
 (3) Steam distillation (4) Sublimation

Ans. (3)

147. HgCl_2 and I_2 both when dissolved in water containing Γ^- ions the pair of species formed is :

- (1) HgI_2 , Γ^- (2) HgI_4^{2-} , I_3^-
 (3) Hg_2I_2 , Γ^- (4) HgI_2 , I_3^-

Ans. (2)

148. Mixture of chloroxylenol and terpineol acts as :

- (1) antiseptic (2) antipyretic
 (3) antibiotic (4) analgesic

Ans. (1)

149. An example of a sigma bonded organometallic compound is :

- (1) Grignard's reagent (2) Ferrocene
 (3) Cobaltocene (4) Ruthenocene

Ans. (1)

150. A first order reaction has a specific reaction rate of 10^{-2} sec^{-1} . How much time will it take for 20g of the reactant to reduce to 5 g ?

- (1) 138.6 sec (2) 346.5 sec
 (3) 693.0 sec (4) 238.6 sec

Ans. (1)

151. Match the interhalogen compounds of column-I with the geometry in column II and assign the correct. code.

Column-I		Column-II	
(a)	XX'	(i)	T-shape
(b)	XX'_3	(ii)	Pentagonal bipyramidal
(c)	XX'_5	(iii)	Linear
(d)	XX'_7	(iv)	Square-pyramidal
		(v)	Tetrahedral

Code :

- | (a) | (b) | (c) | (d) |
|-----------|-------|-------|------|
| (1) (iii) | (i) | (iv) | (ii) |
| (2) (v) | (iv) | (iii) | (ii) |
| (3) (iv) | (iii) | (ii) | (i) |
| (4) (iii) | (iv) | (i) | (ii) |

Ans. (1)

152. Concentration of the Ag^+ ions in a saturated solution of $\text{Ag}_2\text{C}_2\text{O}_4$ is $2.2 \times 10^{-4} \text{ mol L}^{-1}$ Solubility product of $\text{Ag}_2\text{C}_2\text{O}_4$ is :-

- (1) 2.66×10^{-12} (2) 4.5×10^{-11}
 (3) 5.3×10^{-12} (4) 2.42×10^{-8}

Ans. (3)

153. In the electrochemical cell :-

$\text{Zn} | \text{ZnSO}_4(0.01\text{M}) || \text{CuSO}_4(1.0\text{M}) | \text{Cu}$, the emf of this Daniel cell is E_1 . When the concentration of ZnSO_4 is changed to 1.0M and that of CuSO_4 changed to 0.01M, the emf changes to E_2 . From the followings, which one is the relationship

between E_1 and E_2 ? (Given, $\frac{RT}{F} = 0.059$)

- (1) $E_1 < E_2$ (2) $E_1 > E_2$
 (3) $E_2 = 0 \neq E_1$ (4) $E_1 = E_2$

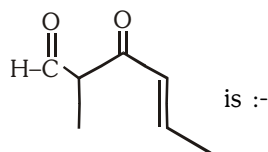
Ans. (2)

154. Which of the following pairs of compounds is isoelectronic and isostructural ?

- (1) $\text{TeI}_2, \text{XeF}_2$
 (2) $\text{IBr}_2^-, \text{XeF}_2$
 (3) $\text{IF}_3, \text{XeF}_2$
 (4) $\text{BeCl}_2, \text{XeF}_2$

Ans. (2)

155. The IUPAC name of the compound



- (1) 5-formylhex-2-en-3-one
- (2) 5-methyl-4-oxohex-2-en-5-al
- (3) 3-keto-2-methylhex-5-enal
- (4) 3-keto-2-methylhex-4-enal

Ans. (4)

156. Which one is the wrong statement ?

- (1) The uncertainty principle is $\Delta E \times \Delta t \geq h/4\pi$
- (2) Half filled and fully filled orbitals have greater stability due to greater exchange energy, greater symmetry and more balanced arrangement.
- (3) The energy of 2s orbital is less than the energy of 2p orbital in case of Hydrogen like atoms

- (4) de-Broglie's wavelength is given by $\lambda = \frac{h}{mv}$,

where m = mass of the particle, v = group velocity of the particle

Ans. (3)

157. Which is the **incorrect** statement ?

- (1) Density decreases in case of crystals with Schottky's defect
- (2) NaCl(s) is insulator, silicon is semiconductor, silver is conductor, quartz is piezo electric crystal
- (3) Frenkel defect is favoured in those ionic compounds in which sizes of cation and anions are almost equal
- (4) $\text{FeO}_{0.98}$ has non stoichiometric metal deficiency defect

Ans. (3)

158. The species, having bond angles of 120° is :-

- (1) ClF_3
- (2) NCl_3
- (3) BCl_3
- (4) PH_3

Ans. (3)

159. For a given reaction, $\Delta H = 35.5 \text{ kJ mol}^{-1}$ and $\Delta S = 83.6 \text{ JK}^{-1}\text{mol}^{-1}$. The reaction is spontaneous at : (Assume that ΔH and ΔS do not vary with temperature)

- (1) $T > 425 \text{ K}$
- (2) All temperatures
- (3) $T > 298 \text{ K}$
- (4) $T < 425 \text{ K}$

Ans. (1)

160. Which of the following is a sink for CO ?

- (1) Micro organism present in the soil
- (2) Oceans
- (3) Plants
- (4) Haemoglobin

Ans. (1)

161. If molality of the dilute solutions is doubled, the value of molal depression constant (K_f) will be :-

- (1) halved
- (2) tripled
- (3) unchanged
- (4) doubled

Ans. (3)

162. Which of the following is dependent on temperature?

- (1) Molarity
- (2) Mole fraction
- (3) Weight percentage
- (4) Molality

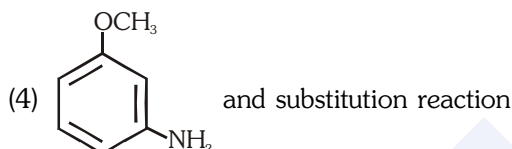
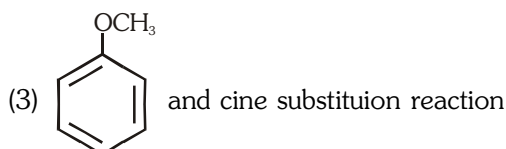
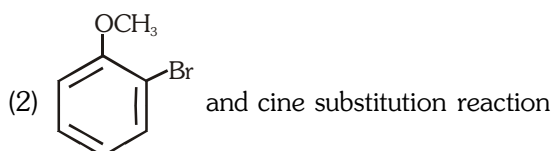
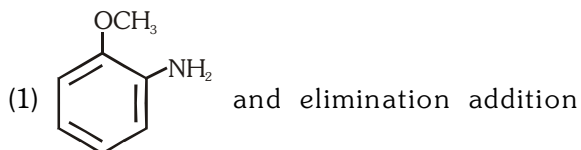
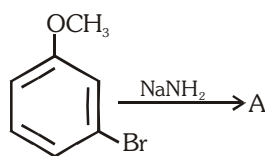
Ans. (1)

163. Which one of the following statements is not correct?

- (1) The value of equilibrium constant is changed in the presence of a catalyst in the reaction at equilibrium
- (2) Enzymes catalyse mainly bio-chemical reactions
- (3) Coenzymes increase the catalytic activity of enzyme
- (4) Catalyst does not initiate any reaction

Ans. (1)

164. Identify A and predict the type of reaction



Ans. (4)

165. The correct order of the stoichiometries of AgCl formed when AgNO₃ in excess is treated with the complexes : CoCl₃.6NH₃, CoCl₃.5NH₃, CoCl₃.4NH₃ respectively is :-

- (1) 3 AgCl, 1 AgCl, 2 AgCl
- (2) 3 AgCl, 2 AgCl, 1 AgCl
- (3) 2 AgCl, 3 AgCl, 1 AgCl
- (4) 1 AgCl, 3 AgCl, 2 AgCl

Ans. (2)

166. The correct statement regarding electrophile is :-

- (1) Electrophile is a negatively charged species and can form a bond by accepting a pair of electrons from another electrophile
- (2) Electrophiles are generally neutral species and can form a bond by accepting a pair of electrons from a nucleophile
- (3) Electrophile can be either neutral or positively charged species and can form a bond by accepting a pair of electrons from a nucleophile
- (4) Electrophile is a negatively charged species and can form a bond by accepting a pair of electrons from a nucleophile

Ans. (3)

167. A gas is allowed to expand in a well insulated container against a constant external pressure of 2.5atm from an initial volume of 2.50 L to a final volume of 4.50L. The change in internal energy ΔU of the gas in joules will be:-

- (1) -500J
- (2) -505J
- (3) +505J
- (4) 1136.25J

Ans. (2)

168. Which of the following reactions is appropriate for converting acetamide to methanamine ?

- (1) Hoffmann hypobromamide reaction
- (2) Stephens reaction
- (3) Gabriels phthalimide synthesis
- (4) Carbylamine reaction

Ans. (1)

169. With respect to the conformers of ethane, which of the following statements is true ?

- (1) Bond angle changes but bond length remains same
- (2) Both bond angle and bond length change
- (3) Both bond angles and bond length remains same
- (4) Bond angle remains same but bond length changes

Ans. (3)

170. In which pair of ions both the species contain S-S bond?

- (1) S₄O₆²⁻, S₂O₃²⁻
- (2) S₂O₇²⁻, S₂O₈²⁻
- (3) S₄O₆²⁻, S₂O₇²⁻
- (4) S₂O₇²⁻, S₂O₃²⁻

Ans. (1)

171. It is because of inability of ns² electrons of the valence shell to participate in bonding that:-

- (1) Sn²⁺ is oxidising while Pb⁴⁺ is reducing
- (2) Sn²⁺ and Pb²⁺ are both oxidising and reducing
- (3) Sn⁴⁺ is reducing while Pb⁴⁺ is oxidising
- (4) Sn²⁺ is reducing while Pb⁴⁺ is oxidising

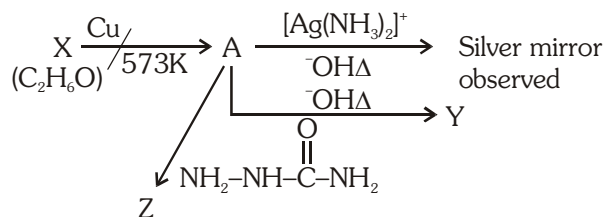
Ans. (In English-4, In Hindi-1)

172. Correct increasing order for the wavelengths of absorption in the visible region the complexes of Co³⁺ is :-

- (1) [Co(H₂O)₆]³⁺, [Co(en)₃]³⁺, [Co(NH₃)₆]³⁺
- (2) [Co(H₂O)₆]³⁺, [Co(NH₃)₆]³⁺, [Co(en)₃]³⁺
- (3) [Co(NH₃)₆]³⁺, [Co(en)₃]³⁺, [Co(H₂O)₆]³⁺
- (4) [Co(en)₃]³⁺, [Co(NH₃)₆]³⁺, [Co(H₂O)₆]³⁺

Ans. (4)

173. Consider the reactions :-

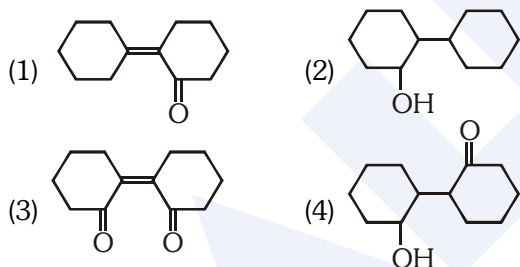


Identify A, X, Y and Z

- (1) A-Methoxymethane, X-Ethanol, Y-Ethanoic acid, Z-Semicarbazide.
- (2) A-Ethanal, X-Ethanol, Y-But-2-enal, Z-Semicarbazone
- (3) A-Ethanol, X-Acetaldehyde, Y-Butanone, Z-Hydrazone
- (4) A-Methoxymethane, X-Ethanoic acid, Y-Acetate ion, Z-hydrazine

Ans. (2)

174. Of the following, which is the product formed when cyclohexanone undergoes aldol condensation followed by heating ?:-



Ans. (1)

175. Which of the following pairs of species have the same bond order ?

- (1) O_2 , NO^+
- (2) CN^- , CO
- (3) N_2 , O_2^-
- (4) CO , NO

Ans. (2)

176. Extraction of gold and silver involves leaching with CN^- ion. Silver is later recovered by :-

- (1) distillation
- (2) zone refining
- (3) displacement with Zn
- (4) liquation

Ans. (3)

177. A 20 litre container at 400 K contains $\text{CO}_2(\text{g})$ at pressure 0.4 atm and an excess of SrO (neglect the volume of solid SrO). The volume of the container is now decreased by moving the movable piston fitted in the container. The maximum volume of the container, when pressure of CO_2 attains its maximum value, will be :-

(Given that : $\text{SrCO}_3(\text{s}) \rightleftharpoons \text{SrO}(\text{s}) + \text{CO}_2(\text{g})$, $K_p = 1.6 \text{ atm}$)

- (1) 10 litre
- (2) 4 litre
- (3) 2 litre
- (4) 5 litre

Ans. (4)

178. Pick out the correct statement with respect to $[\text{Mn}(\text{CN})_6]^{3-}$:-

- (1) It is sp^3d^2 hybridised and tetrahedral
- (2) It is d^2sp^3 hybridised and octahedral
- (3) It is dsp^2 hybridised and square planar
- (4) It is sp^3d^2 hybridised and octahedral

Ans. (2)

179. The reason for greater range of oxidation states in actinoids is attributed to :-

- (1) actinoid contraction
- (2) 5f, 6d and 7s levels having comparable energies
- (3) 4f and 5d levels being close in energies
- (4) the radioactive nature of actinoids

Ans. (2)

180. Which of the following statements is not correct :-

- (1) Ovalbumin is a simple food reserve in egg-white
- (2) Blood proteins thrombin and fibrinogen are involved in blood clotting
- (3) Denaturation makes the proteins more active
- (4) Insulin maintains sugar level in the blood of a human body

Ans. (3)